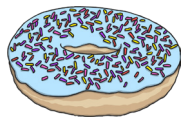


Year 1 Maths Activity Mat: Autumn 1

4

Section 1

Rashid has 6 doughnuts.
He shares them equally with his friend.
How many do they each have?



Section 4

Complete the pattern.

0 2 4 6 _ _ _



Section 6

Draw a cup **next** to the teddy.




Section 2

How many sides does a square have? Write the answer on the correct shape.



Section 5

How many flowers are there altogether?



Section 7

Today is Wednesday.
Circle what day it will be **tomorrow**.

Wednesday Thursday Friday

Section 3

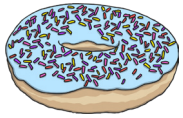
Use a ruler to draw a line that is 3cm long.

Section 8

I have 2 pairs of socks. How many socks do I have altogether?

Section 1


Rashid has 6 doughnuts.
He shares them equally with his friend.
How many do they each have?



3

Section 2

How many sides does a square have? Write the answer on the correct shape.




Section 4

Complete the pattern.

0 2 4 6 8 10 12

Section 5

How many flowers are there altogether?



8

Section 6

Draw a cup **next** to the teddy.



Section 7

Today is Wednesday.
Circle what day it will be **tomorrow**.

Wednesday **Thursday** Friday

Section 8

I have 2 pairs of socks. How many socks do I have altogether?

4

Year 1 Maths Activity Mat: Autumn 1

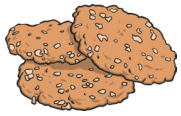
4

Section 1

Milly has 8 biscuits.

She shares them equally with her friend.

How many biscuits do they each have?



Section 4

Complete the pattern.

0 5 10 15 _ _ _


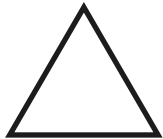

Section 6

Draw a hat **on top** of the teddy.




Section 2

How many sides does a triangle have? Write the answer on the correct shape.



Section 5

How many flowers are there altogether?



Section 7

Today is Friday.

Circle what day it was **yesterday**.

Thursday

Friday

Saturday

Section 3

Use a ruler to draw a line that is 6cm long.

Section 8

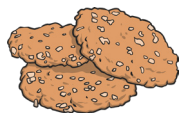
I have 4 pairs of socks. How many socks do I have altogether?

Section 1

Milly has 8 biscuits.

She shares them equally with her friend.



How many biscuits do they each have?



4

Section 2

How many sides does a triangle have? Write the answer on the correct shape.



Section 3

Use a ruler to draw a line that is 6cm long.




Section 4

Complete the pattern.

0 5 10 15 20 25 30

Section 5

How many flowers are there altogether?



12

Section 6

Draw a hat **on top** of the teddy.



Section 7

Today is Friday.

Circle what day it was **yesterday**.

Thursday

Friday

Saturday

Section 8

I have 4 pairs of socks. How many socks do I have altogether?

8

Year 1 Maths Activity Mat: Autumn 1

Section 1

Shireen has 12 conkers.

She shares them equally with her friend.

How many do they each have?



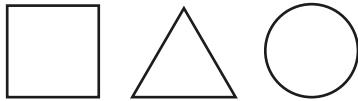
Section 4

Complete the pattern.

20 25 _ 35 40 _ _

Section 2

Circle the shape with 4 sides. Match the name to the shape.



triangle

circle

square

Section 5

How many flowers are there altogether?



Section 6

Draw a cup **in front** of the teddy.



Section 7

Today is Tuesday. What day was it 2 days ago?

Circle the correct day.

Sunday Monday Tuesday Wednesday

Section 3

Use a ruler to draw a line that is 1cm longer than this one. How long is your line?

Section 8

I have 10 pairs of socks. How many socks do I have altogether?

Section 1

Shireen has 12 conkers.
She shares them equally with her friend.
How many do they each have?



6

Section 4

Complete the pattern.

20 25 30 35 40 45 50

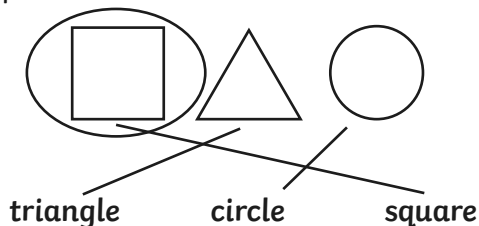
Section 6

Draw a cup **in front** of the teddy.



Section 2

Circle the shape with 4 sides. Match the name to the shape.



Section 5

How many flowers are there altogether?



16

Section 7

Today is Tuesday. What day was it 2 days ago?
Circle the correct day.

Sunday Monday Tuesday Wednesday

Section 3

Use a ruler to draw a line that is 1cm longer than this one. How long is your line?



8cm

Section 8

I have 10 pairs of socks. How many socks do I have altogether?

20